
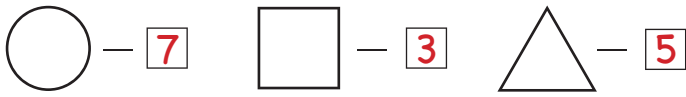


Activity Page

How many?




$\triangle = 3$ $\circ = 4$ $\square = 8$

$3 + 4 = 7$ $3 + 4 + 3 = 10$

$3 + 8 = 11$ $4 + 3 + 8 = 15$


$8 + 4 = 12$ $8 + 4 + 8 = 20$

Find 10 differences



Maze

Help skater boy find his way to the finish line



Word Search

AUTUMN
MARCH
APRIL
MAY
JUNE
JULY
AUGUST
SNOW

ICE
HAIL
RAIN
FLOWERS
WINDY
COAT
SPRING
BLOOM

| | | | | | | | | | | |
|---|---|---|---|---|---|---|---|---|---|---|
| F | A | V | M | A | Y | I | H | A | I | L |
| H | T | S | U | G | U | A | C | Z | W | A |
| E | O | P | B | L | J | P | O | E | | U |
| M | A | R | C | H | U | R | A | I | N | T |
| A | V | O | A | N | | P | G | D | U | |
| R | E | N | A | S | E | L | S | Q | Y | M |
| C | W | G | T | E | N | J | U | L | Y | N |
| T | Q | J | D | F | L | O | W | E | R | S |
| B | L | O | O | M | X | R | W | S | D | B |